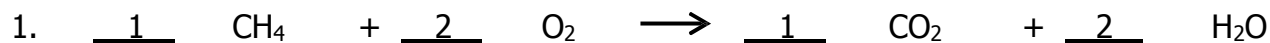


Name: _____

Date: _____

Balancing Equations

Balance the following chemical equations.



Combustion reaction



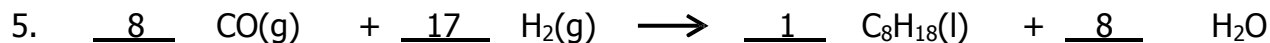
Combination or synthesis reaction



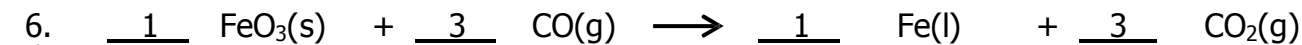
Combination or synthesis reaction



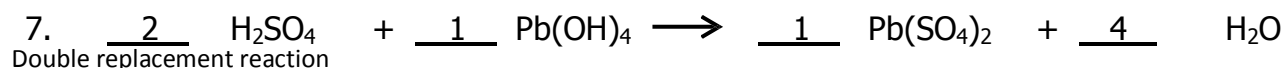
Combination or synthesis reaction



N/A



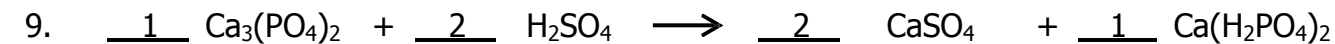
N/A



Double replacement reaction



Single replacement reaction



Double replacement reaction



N/A