

NAME _____


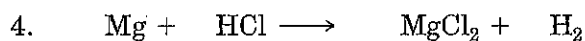
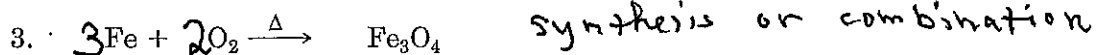
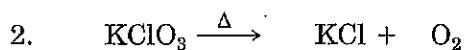
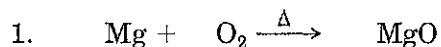
SECTION _____ DATE _____

INSTRUCTOR _____

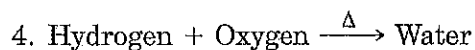
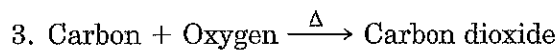
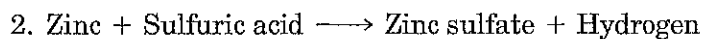
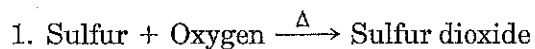
EXERCISE 6

Equation Writing and Balancing I

Name the type (9.3)
Balance the following equations:



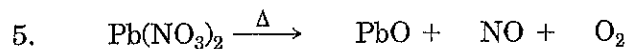
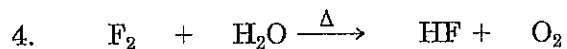
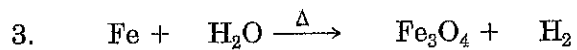
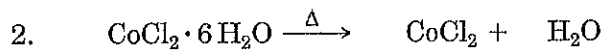
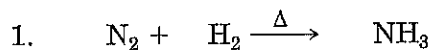
write the name.
Beneath each word equation write the formula equation and balance it. Remember that oxygen and hydrogen are diatomic molecules.



EXERCISE 6 (continued)

NAME _____

Balance the following equations:



Beneath each word equation write and balance the formula equation. Oxygen, hydrogen, and bromine are diatomic molecules

