

## Percent Composition Worksheet

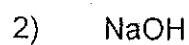
Find the percent compositions of all of the elements in the following compounds:



Cu: \_\_\_\_\_

Br: \_\_\_\_\_

---

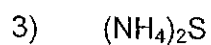


Na: \_\_\_\_\_

O: \_\_\_\_\_

H: \_\_\_\_\_

---



N: \_\_\_\_\_

H: \_\_\_\_\_

S: \_\_\_\_\_

---



N: \_\_\_\_\_

S: \_\_\_\_\_

## Percent Composition Worksheet - Solutions

Find the percent compositions of all of the elements in the following compounds:



Cu: 28.4%

Br: 71.6%

---

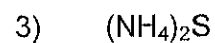


Na: 57.5%

O: 40.0%

H: 2.5%

---



N: 41.1%

H: 11.8%

S: 47.1%

---



N: 30.4%

S: 69.6%