

Use your scantron to answer questions 1-34. Some Questions may have more than one answer.
Write answers to the questions without numbers directly on the exam.

Section: 7-1 Types of Attractive Forces

- 1) For a series of small molecules of comparable molecular weight, which one of the following choices lists the intermolecular forces in the correct increasing order?
 A) London forces < dipole-dipole forces < hydrogen bonds
B) hydrogen bonds < dipole-dipole forces < London forces
C) dipole-dipole forces < hydrogen bonds < London forces
D) London forces < hydrogen bonds < dipole-dipole forces

- 2) London dispersion forces attractions between molecules depends on what two factors?
 A) Molar mass and shape
B) Vapor pressure and size
C) Molar mass and volatility
D) Volatility and shape

- 3) Which of the following statements about intermolecular forces is true?
A) London dispersions forces are the strongest of the three types.
B) They occur within molecules rather than between the molecules.
C) Hydrogen bonding occurs between any two molecules that contain hydrogen atoms.
 D) Dipole-dipole interactions occurs between two polar molecules.

- 4) When NaCl dissolves in water, the force of attraction that exists between Na^+ and H_2O is called:
A) dipole-dipole B) ion-ion C) hydrogen bonding D) ion-dipole

- 5) _____ attractions are the only ones that all molecules have regardless of what they are composed of.
A) Dipole-dipole attractions
B) Hydrogen bonding
 C) London dispersion forces
D) Ion-ion interactions

- 6) Which of the following compounds cannot exhibit hydrogen bonding?
A) H_2O B) NH_3 C) HF D) CH_4

- 7) Which one of these molecules can act as a hydrogen bond acceptor but not a donor?
 A) $\text{CH}_3\text{-O-CH}_3$ B) $\text{C}_2\text{H}_5\text{OH}$ C) CH_3NH_2 D) $\text{CH}_3\text{CO}_2\text{H}$

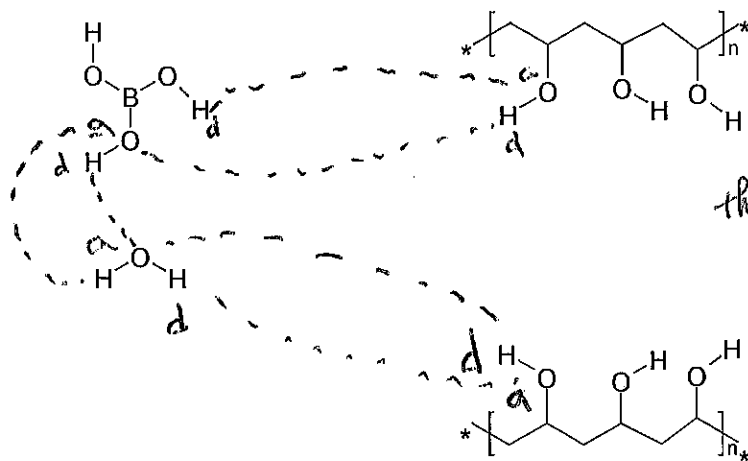
- 8) How many hydrogen bonds can $\text{CH}_3\text{-O-CH}_2\text{OH}$ form with water?
A) 3 B) 4 C) 5 D) 6

- 9) The predominant intermolecular force in $(\text{CH}_3)_2\text{NH}$ is:
A) London-dispersion forces
B) ion-dipole attractions
 C) hydrogen bonding
D) dipole-dipole attractions

10) Which of the following pairs of compounds contain the same intermolecular forces?

- A) CH_3CH_3 and H_2O *London / H-bond*
- B) $\text{CH}_3\text{CH}_2\text{OH}$ and H_2O** *H-bond / H-bond*
- C) H_2S and CH_4 *London / London*
- D) NH_3 and CH_4 *H-bond / London*

(10 pt) Polyvinyl alcohol (PVA) mixes with water to produce a milky solution. When boric acid is added and mixed, the solution turns to jelly. Explain what happens and draw a diagram showing this using the following structures for PVA, boric acid and water showing the attractive forces that occur. Label a pair of "donor" and "acceptor" atoms.



there are many other possibilities

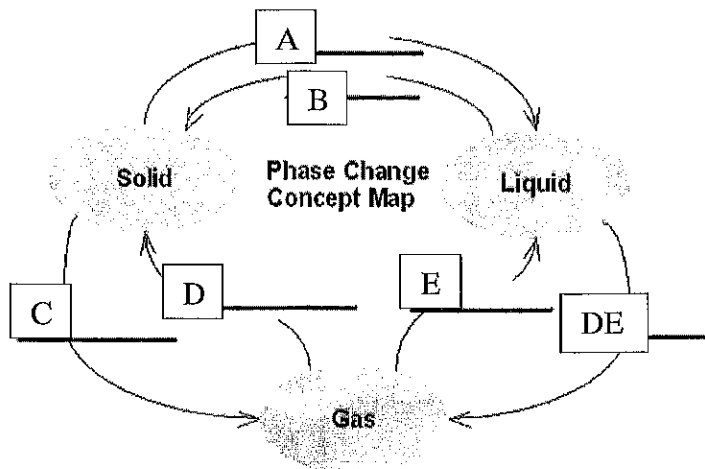
The very liquid PVA and boric acid solutions became jelly when hydrogen bond formed between the boric acid and PVA.

Section: 7-2 Liquids and Solids: Attractive Forces Are Everywhere

11) The transition from the gas phase directly to the solid phase is called:

- A) condensation
- B) freezing
- ~~C) sublimation~~
- D) deposition**

12) The slow disappearance of ice on the sidewalk during winter is represented by C in this diagram.



13) Which of these alkanes has the lowest boiling point?

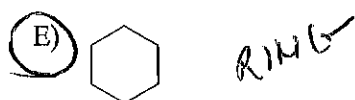
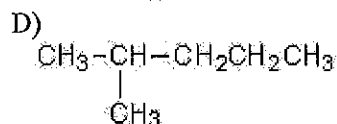
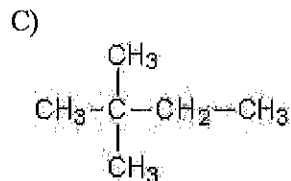
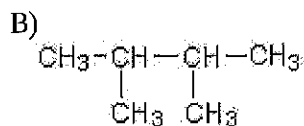
- A) C_2H_6**
- B) C_4H_{10}
- C) C_6H_{14}
- D) C_8H_{18}

14) Which of the following compounds will have the lowest boiling point?

- A) $\text{CH}_3\text{CH}_2\text{OH}$ *H-bond*
- B) NH_3 *H-bond*
- C) CHCl_3 *dipole*
- D) CH_4** *London*

20 pt

15) Which of the following alkanes has the highest boiling point?

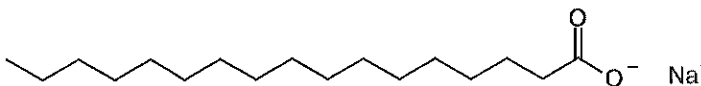


Section: 7-3 Attractive Forces and Solubility

16) The long hydrocarbon tails of soap molecules are:

- A) hydrophilic and attracted to water
 B) hydrophobic and attracted to water
 C) hydrophobic and attracted to oils
 D) hydrophilic and attracted to oils

17) Which of the following describes this type of compound?



- A) Emulsifier B) soap C) surfactant D) detergent E) amphiphatic (AB) all of these

Which of the following compounds would be soluble in the substances listed in the answers?

STRUCTURE	ANSWERS
18) $\begin{array}{c} \text{O} \\ \\ \text{CH}_3-\text{C}-\text{CH}_3 \end{array}$ A C	A) Water soluble
19) $\text{CH}_3\text{CH}_2\text{CH}_2\text{CH}_3$ B	B) Fat soluble
20) NH_4Cl A	C) Soluble in both fat and water
21) $\text{CH}_3\text{CH}_2\text{CH}_2\text{OH}$ A	D) Insoluble in fat and water.

Section: 7-4 Gases: Attractive Forces Are Limited

22). Which of the following is/are characteristics of gases?

- A) high compressibility
 B) relatively long distances between molecules
 C) formation of homogeneous mixtures
 D) all of the above
 E) none of the above

16 pt

23) What is the pressure of nitrogen in atmospheres of a sample that is at 745 mmHg?

- A) 1.02 atm **B) 0.980 atm** C) 0.750 atm D) 1.50 atm

$$745 \times \frac{1 \text{ atm}}{760 \text{ mmHg}}$$

(6 pt) A gas has a volume of 460 mL at 500 mm Hg. What will be the volume at 912 mm?

$$V_1 P_1 = V_2 P_2$$

$$460 \times 500 = V_2 \times 912$$

$$\frac{460 \times 500}{912} = V_2 \rightarrow V_2 = \boxed{252 \text{ mL}}$$

(6 pt) A gas has a volume of 10L at 32 °F. What is the final temperature of the gas (in °C) if its volume increased to 25 L?

$$\frac{V_1}{T_1} = \frac{V_2}{T_2}$$

$$32^\circ \text{F} = 0^\circ \text{C} = 273 \text{ K}$$

$$V_1 = 10 \text{ L} \quad T_1 = \cancel{32} + 273 = 273$$

$$V_2 = 25 \text{ L} \quad T_2 = ?$$

$$\frac{10}{273} = \frac{25}{T_2}$$

$$T_2 = \frac{273 \times 25}{10} = 273 + 675 = 948 \text{ K} = 675^\circ \text{C}$$

410 °C

Section: 7-5 Dietary Lipids and Trans Fats

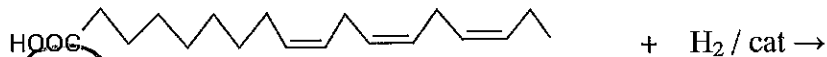
24) Oils are generally _____ at room temperature and are obtained from _____.

- A) solids; animals **B) liquids; plants** C) solids; plants D) liquids; animal

25) What chemical process is used to convert oils into fats and semi-solids?

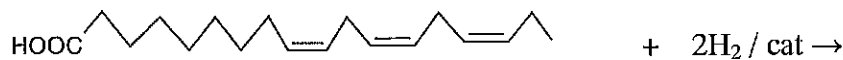
- A) Hydration **B) Hydrogenation** C) Saponification D) Esterification

26) If this reaction does not go to completion (partial hydrogenation) then



- A) A trans fatty acid is produced.**
 B) A saturated fatty acid (stearic) is produced.
 C) Soap is produced.
 D) Nothing happens, linolenic acid remains.
 E) Partial hydrolysis occurs.

(4 pt) Complete this reaction



Section: 7-6 Attractive Forces and the Cell Membrane

27) In the fluid-mosaic model that explain structure of plasma membranes,

- A) There are three layers of glycerophospholipid molecules.
 B) Two layers of glycerophospholipid molecules have their nonpolar sections oriented to the inside of the membrane.
 C) Two layers of glycerophospholipid molecules have their nonpolar sections along the outer surface of the membrane.
 D) A single row of glycerophospholipid molecules forms a barrier between the inside and outside of the cell.
 E) Two layers of proteins separate the contents inside a cell from the surrounding fluids.

28) In a lipid bilayer:

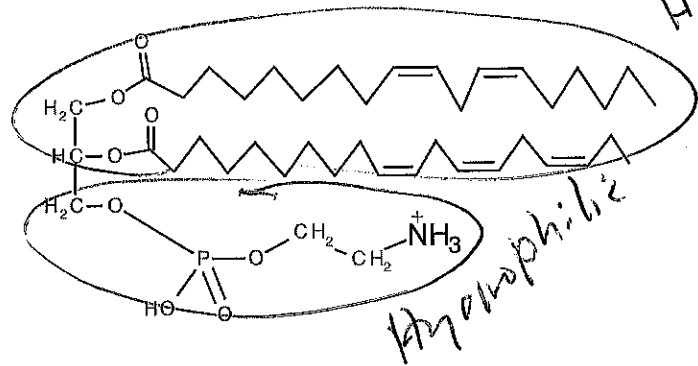
- A) the hydrophilic heads of the molecules point towards each other
 B) all the molecules are triglycerides
 C) the hydrophobic heads point to the hydrophilic tails
 D) the hydrophobic tails of the molecules point toward each other

Consider the lipid structure shown at the right.

(4 pt) Circle and identify the hydrophilic and hydrophobic parts of this lipid.

(2 pt) What is the major function of this lipid?

Forms a lipid bilayer membrane.

**Use the following to answer Questions 14-20**

- 29) Which of the following when embedded in a membrane, makes it less flexible? **A**
- 30) Which of the lipids is the most polar? **D**
- 31) Sex hormones belong to this class of lipid. **E**
- 32) This lipid is used to store fatty acids in humans. **C**
- 33) Lecithin is this kind of lipid. **D**
- 34) Which of these lipids contains only one ester bond? **DE**

- A) cholesterol
 B) carbohydrate
 C) triglyceride
 D) phospholipid
 E) steroid
 AB) protein
 AC) nucleic acid
 AD) fatty acid
 DE) No answer is correct.